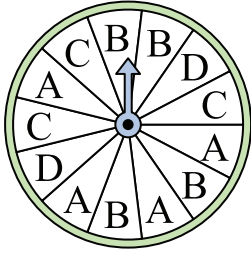




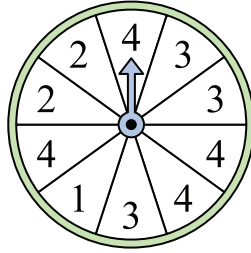
Solve each problem.

Answers

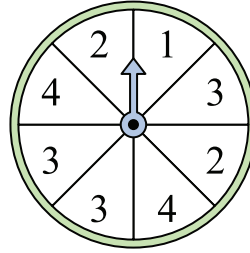
- 1) Which letter is the spinner least likely to land on?



- 2) Which number is the spinner least likely to land on?



- 3) Which number is the spinner most likely to land on?



1. \_\_\_\_\_

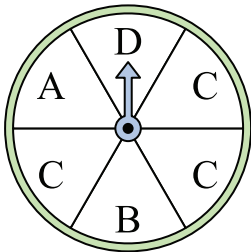
2. \_\_\_\_\_

3. \_\_\_\_\_

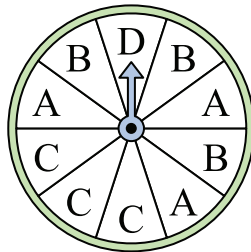
4. \_\_\_\_\_

5. \_\_\_\_\_

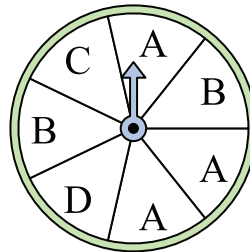
- 4) Which letter is the spinner most likely to land on?



- 5) Which letter is the spinner least likely to land on?



- 6) Which two letters is the spinner equally likely to land on?




6. \_\_\_\_\_

7. \_\_\_\_\_


8. \_\_\_\_\_

9. \_\_\_\_\_

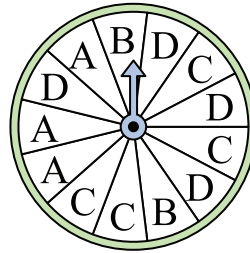
- 7) Which number is the spinner most likely to land on?



- 8) Which number is the spinner most likely to land on?



- 9) Which letter is the spinner least likely to land on?




10. \_\_\_\_\_

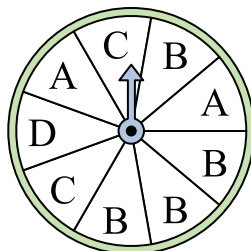
11. \_\_\_\_\_

12. \_\_\_\_\_

- 10) Which number is the spinner least likely to land on?



- 11) Which letter is the spinner most likely to land on?



- 12) Which two numbers is the spinner equally likely to land on?

